

JAYPEE UNIVERSITY OF INFORMATION TECHNOLOGY, WAKNAGHAT

TEST -1 EXAMINATION- Feb - 2018

B.Tech. IV Semester

COURSE CODE: 10B11CE413

MAX. MARKS:15

COURSE NAME: Structure Analysis

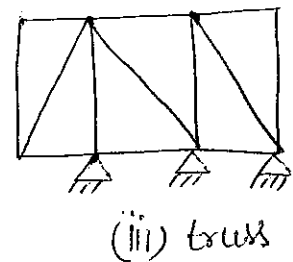
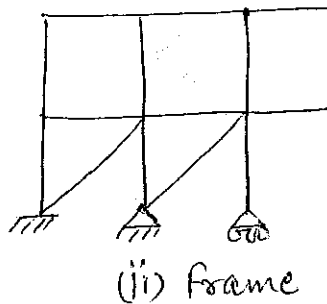
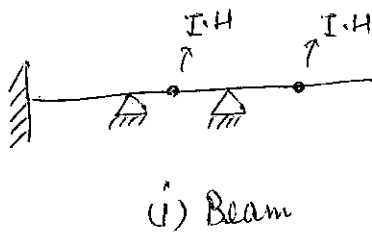
COURSE CREDITS: 04

MAX. TIME: 1 Hrs

Note: All questions are compulsory. Carrying of mobile phone during examinations will be treated as case of unfair means. Assume any data if required

Q.1. Differentiate between determinate and indeterminate structure and mention their advantages & disadvantages. (3)

Q.2. Find the static & kinematic indeterminacy of the following structures. (6)



Q.3. Solve the given beam by using force method and draw the bending moment diagram & deflection pattern of the beam. (6)

